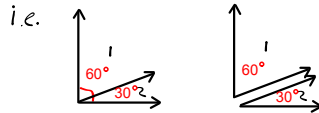


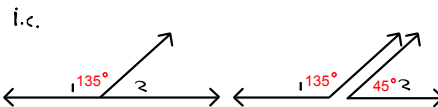
# Lesson 7.2a Complementary and Supplementary Angles

## 7.2a Complementary & Supplementary Angles

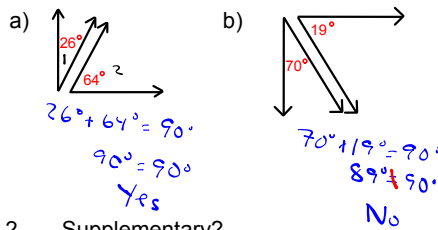
**Complementary angles** - when the sum of two angles are exactly 90 degrees



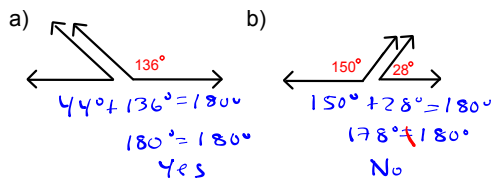
**Supplementary angles** - when the sum of two angles are exactly 180 degrees



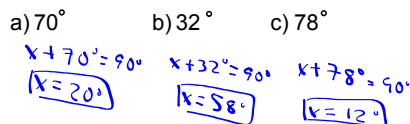
Ex. 1 Complementary?



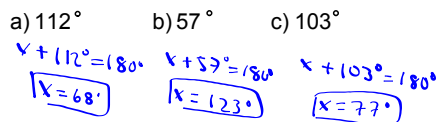
Ex. 2 Supplementary?



Ex. 3 What is the complementary angle?



Ex. 4 What is the supplementary angle?



Ex. 5 Find complementary/supplementary angles

