

# 2nd Grade Summer Work Packet



## Directions:

1. Complete activities from calendar. Keep all writing assignments in a spiral journal or in a folder.
2. Choose 1 book report to complete.
3. Choose 8 writing prompts to complete. Write in complete sentences and illustrate.
4. Finish all math activity sheets.


*2<sup>nd</sup> Grade Teachers*

## Writing Prompts

Choose 8 prompts. Write a paragraph (3-5 sentences) in complete sentences. Spell most words correctly. Illustrate.


- I know how to \_\_\_\_\_. First...
- What I really enjoy doing is...
- I feel miserable when....
- Last night, I did...
- My worst fear...
- The funniest thing I ever saw was...
- I remember when I first ate \_\_\_\_\_...
- My best birthday
- When I grow up
- Friendship is ...
- Fifteen places I want to go in my lifetime
- I found a magic wand
- On the planet Zeon...
- In the year 2099...
- The day I met the president...
- If I could climb a rainbow...
- If I could meet anyone in the world...
- If I were invisible...
- If I won \$100,000...
- Write a letter to a friend
- Write 3 questions for your new teacher
- What is your favorite color? Why?
- How do you make your favorite sandwich?

Name \_\_\_\_\_



Monday	Tuesday	Wednesday	Thursday	Friday
Find a picture you like in a magazine. Write about it. <input type="checkbox"/>	Read or listen to a story. Title. _____ <input type="checkbox"/>	Which word does not belong: deer, dog, tree, lion, cat? Why? <input type="checkbox"/>	Write a letter to a friend. <input type="checkbox"/>	Write the numbers from 74 to 100. <input type="checkbox"/>
Name five words that begin with tr, cr, gr, fr and pr. <input type="checkbox"/>	Copy and finish this sentence: A lamb is as soft as _____. Illustrate. <input type="checkbox"/>	Solve these: 5+5=    8+2= 2+4=    6+4= 3+7=    2+5= 4+0= <input type="checkbox"/>	Draw three musical instruments that you blow. <input type="checkbox"/>	Write this sentence: The dog had a big spot. Draw a picture. <input type="checkbox"/>
Have someone read to you. Title _____ <input type="checkbox"/>	Glue pieces of a plastic foam cup to paper to make a picture. <input type="checkbox"/>	Write the names of two vegetables and fruits. <input type="checkbox"/>	Line up 10 pennies. Point to the 3rd, 8th, 4th, 6th, and 1st pennies. Draw. Label. <input type="checkbox"/>	Tell someone why you wash your hands before eating. <input type="checkbox"/>
You are the president. Write three things you will do. <input type="checkbox"/>	Solve these: 10-3=    5-4= 10-4=    6-6= 10-7=    9-3= 10-5= <input type="checkbox"/>	Name three words that rhyme with rain, dream, shy, and fair. <input type="checkbox"/>	Play Simon Says with someone. <input type="checkbox"/>	Visit a library. Check out a book. <input type="checkbox"/>
Name three words that rhyme with boat, jeep, car, and mine. <input type="checkbox"/>	Count to 10 by 2's. <input type="checkbox"/>	Write five words you know. Read them to someone. <input type="checkbox"/>	Draw your favorite animal. Color it a silly color. <input type="checkbox"/>	Write and learn two emergency phone numbers. <input type="checkbox"/>

Choose at least three activities each week for your child to do as homework. Check the square when an activity has been completed. Please sign and return this sheet to the teacher at the beginning of school.



Parent's signature \_\_\_\_\_

Name \_\_\_\_\_

Write the uppercase letters from **A** to **Z**.

Write the uppercase letters from **Z** to **A**.

Name \_\_\_\_\_


Write the lowercase letters from **a** to **z**.

Write the lowercase letters from **z** to **a**.

Name \_\_\_\_\_

Capitalization  
Names

## Customer Confusion



Read the words in each box.

Circle each word that needs a capital letter.


1. car eric go	2. lisa van tire	3. road sky kelly
4. map david wheel	5. roof slow tyrone	6. jason light stop
7. kim door big	8. far drive brenda	9. horn gas maria
10. window lock harry	11. nancy back wiper	12. trunk josé key

Read the question. Write your answer on the lines.

What should Mouse Mechanic remember to do each time he writes a name?

---

---



# An Information Book

(A book that helps you learn something new)



Title \_\_\_\_\_

Author \_\_\_\_\_

What was this book about? \_\_\_\_\_

What did you know about this subject before you read the book? \_\_\_\_\_

What did you learn that you did not already know?

1. \_\_\_\_\_

2. \_\_\_\_\_


3. \_\_\_\_\_

Did you like this book? Why or why not? \_\_\_\_\_

Do you want to read more books about this subject?


\_\_\_\_\_

\_\_\_\_\_





# A Scary Story



Title \_\_\_\_\_

Author \_\_\_\_\_

Who were the main characters in this story?

\_\_\_\_\_  
\_\_\_\_\_

What was this story about? \_\_\_\_\_

\_\_\_\_\_  
\_\_\_\_\_

Who was scared? \_\_\_\_\_

Why was that character scared? \_\_\_\_\_

\_\_\_\_\_  
\_\_\_\_\_

Were you scared?    yes    no    just a little

What would have made this story scarier? \_\_\_\_\_

\_\_\_\_\_  
\_\_\_\_\_  
\_\_\_\_\_  
\_\_\_\_\_





# A Book That Tells How to Make Something

Title \_\_\_\_\_

Author \_\_\_\_\_

What did you make? \_\_\_\_\_

Draw a picture of what you made.


What materials did you use?

\_\_\_\_\_

\_\_\_\_\_

\_\_\_\_\_

\_\_\_\_\_



Why did you choose this? \_\_\_\_\_

\_\_\_\_\_


Did you have fun making it?    yes    no

Was it hard to make?    yes    no    a little

Are you going to make something else? Why or why not?

\_\_\_\_\_

\_\_\_\_\_





# A Biography

(A true story about a real person)

Title \_\_\_\_\_

Author \_\_\_\_\_

Who is this book about? \_\_\_\_\_

What do you think this person was like? \_\_\_\_\_

\_\_\_\_\_  
\_\_\_\_\_

Why did someone write a book about this person?

\_\_\_\_\_  
\_\_\_\_\_

Would you like to have this person as your friend? \_\_\_\_\_

Why or why not? \_\_\_\_\_


\_\_\_\_\_  
\_\_\_\_\_

If you could talk to this person today, what would you want to tell him or her?

\_\_\_\_\_  
\_\_\_\_\_  
\_\_\_\_\_



# A Fairy Tale



Title \_\_\_\_\_

Author \_\_\_\_\_

Who was your favorite character? \_\_\_\_\_

\_\_\_\_\_

Tell about something that happened in your book that could not happen in real life:

\_\_\_\_\_

\_\_\_\_\_

\_\_\_\_\_

What was your favorite part? \_\_\_\_\_

\_\_\_\_\_

If you could be anyone in this book, who would you be, and what would you do? Why?

\_\_\_\_\_

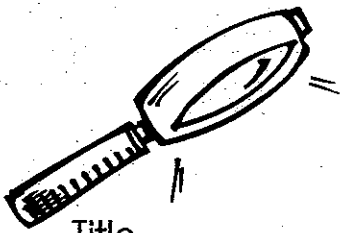
\_\_\_\_\_

\_\_\_\_\_

\_\_\_\_\_

\_\_\_\_\_

\_\_\_\_\_



# A Mystery



Title \_\_\_\_\_

Author \_\_\_\_\_

What was the mystery? \_\_\_\_\_

Who needed help solving this mystery? \_\_\_\_\_

Who solved the mystery? \_\_\_\_\_

How did he or she solve the mystery? \_\_\_\_\_

If you were writing a mystery book, who would the main character be? \_\_\_\_\_

What would the mystery be? \_\_\_\_\_


How would your book end? \_\_\_\_\_

Name: \_\_\_\_\_

Date: \_\_\_\_\_

# Summer Work Packet for 2nd Grade

*What did the zookeeper say when she saw four elephants in sunglasses coming over a hill? Nothing. She didn't recognize them.*



Complete the Activity.

$\begin{array}{r} 1 \\ + 10 \\ \hline \end{array}$	$\begin{array}{r} 10 \\ + 0 \\ \hline \end{array}$	$\begin{array}{r} 7 \\ + 4 \\ \hline \end{array}$	$\begin{array}{r} 3 \\ + 10 \\ \hline \end{array}$	$\begin{array}{r} 2 \\ + 2 \\ \hline \end{array}$	$\begin{array}{r} 1 \\ + 8 \\ \hline \end{array}$	$\begin{array}{r} 10 \\ + 1 \\ \hline \end{array}$	$\begin{array}{r} 2 \\ + 6 \\ \hline \end{array}$	$\begin{array}{r} 1 \\ + 3 \\ \hline \end{array}$	$\begin{array}{r} 8 \\ + 0 \\ \hline \end{array}$
$\begin{array}{r} 4 \\ + 0 \\ \hline \end{array}$	$\begin{array}{r} 8 \\ + 6 \\ \hline \end{array}$	$\begin{array}{r} 9 \\ + 6 \\ \hline \end{array}$	$\begin{array}{r} 10 \\ + 5 \\ \hline \end{array}$	$\begin{array}{r} 2 \\ + 3 \\ \hline \end{array}$	$\begin{array}{r} 10 \\ + 4 \\ \hline \end{array}$	$\begin{array}{r} 3 \\ + 6 \\ \hline \end{array}$	$\begin{array}{r} 5 \\ + 5 \\ \hline \end{array}$	$\begin{array}{r} 2 \\ + 7 \\ \hline \end{array}$	$\begin{array}{r} 4 \\ + 3 \\ \hline \end{array}$
$\begin{array}{r} 1 \\ + 2 \\ \hline \end{array}$	$\begin{array}{r} 9 \\ + 0 \\ \hline \end{array}$	$\begin{array}{r} 5 \\ + 3 \\ \hline \end{array}$	$\begin{array}{r} 4 \\ + 10 \\ \hline \end{array}$	$\begin{array}{r} 7 \\ + 5 \\ \hline \end{array}$	$\begin{array}{r} 10 \\ + 7 \\ \hline \end{array}$	$\begin{array}{r} 8 \\ + 3 \\ \hline \end{array}$	$\begin{array}{r} 9 \\ + 7 \\ \hline \end{array}$	$\begin{array}{r} 2 \\ + 0 \\ \hline \end{array}$	$\begin{array}{r} 7 \\ + 2 \\ \hline \end{array}$
$\begin{array}{r} 8 \\ + 5 \\ \hline \end{array}$	$\begin{array}{r} 3 \\ + 4 \\ \hline \end{array}$	$\begin{array}{r} 5 \\ + 4 \\ \hline \end{array}$	$\begin{array}{r} 7 \\ + 1 \\ \hline \end{array}$	$\begin{array}{r} 5 \\ + 8 \\ \hline \end{array}$	$\begin{array}{r} 10 \\ + 6 \\ \hline \end{array}$	$\begin{array}{r} 8 \\ + 9 \\ \hline \end{array}$	$\begin{array}{r} 9 \\ + 5 \\ \hline \end{array}$	$\begin{array}{r} 10 \\ + 8 \\ \hline \end{array}$	$\begin{array}{r} 2 \\ + 4 \\ \hline \end{array}$
$\begin{array}{r} 10 \\ + 2 \\ \hline \end{array}$	$\begin{array}{r} 5 \\ + 7 \\ \hline \end{array}$	$\begin{array}{r} 1 \\ + 1 \\ \hline \end{array}$	$\begin{array}{r} 7 \\ + 9 \\ \hline \end{array}$	$\begin{array}{r} 5 \\ + 1 \\ \hline \end{array}$	$\begin{array}{r} 9 \\ + 8 \\ \hline \end{array}$	$\begin{array}{r} 6 \\ + 5 \\ \hline \end{array}$	$\begin{array}{r} 5 \\ + 9 \\ \hline \end{array}$	$\begin{array}{r} 4 \\ + 6 \\ \hline \end{array}$	$\begin{array}{r} 4 \\ + 9 \\ \hline \end{array}$
$\begin{array}{r} 4 \\ + 8 \\ \hline \end{array}$	$\begin{array}{r} 3 \\ + 3 \\ \hline \end{array}$	$\begin{array}{r} 4 \\ + 1 \\ \hline \end{array}$	$\begin{array}{r} 1 \\ + 5 \\ \hline \end{array}$	$\begin{array}{r} 8 \\ + 10 \\ \hline \end{array}$	$\begin{array}{r} 9 \\ + 4 \\ \hline \end{array}$	$\begin{array}{r} 3 \\ + 0 \\ \hline \end{array}$	$\begin{array}{r} 7 \\ + 8 \\ \hline \end{array}$	$\begin{array}{r} 9 \\ + 2 \\ \hline \end{array}$	$\begin{array}{r} 2 \\ + 8 \\ \hline \end{array}$
$\begin{array}{r} 6 \\ + 6 \\ \hline \end{array}$	$\begin{array}{r} 1 \\ + 7 \\ \hline \end{array}$	$\begin{array}{r} 6 \\ + 8 \\ \hline \end{array}$	$\begin{array}{r} 6 \\ + 10 \\ \hline \end{array}$	$\begin{array}{r} 3 \\ + 5 \\ \hline \end{array}$	$\begin{array}{r} 1 \\ + 6 \\ \hline \end{array}$	$\begin{array}{r} 8 \\ + 4 \\ \hline \end{array}$	$\begin{array}{r} 8 \\ + 8 \\ \hline \end{array}$	$\begin{array}{r} 1 \\ + 0 \\ \hline \end{array}$	$\begin{array}{r} 6 \\ + 2 \\ \hline \end{array}$
$\begin{array}{r} 3 \\ + 2 \\ \hline \end{array}$	$\begin{array}{r} 7 \\ + 6 \\ \hline \end{array}$	$\begin{array}{r} 7 \\ + 3 \\ \hline \end{array}$	$\begin{array}{r} 5 \\ + 2 \\ \hline \end{array}$	$\begin{array}{r} 2 \\ + 5 \\ \hline \end{array}$	$\begin{array}{r} 10 \\ + 3 \\ \hline \end{array}$	$\begin{array}{r} 5 \\ + 0 \\ \hline \end{array}$	$\begin{array}{r} 6 \\ + 0 \\ \hline \end{array}$	$\begin{array}{r} 7 \\ + 7 \\ \hline \end{array}$	$\begin{array}{r} 8 \\ + 2 \\ \hline \end{array}$
$\begin{array}{r} 3 \\ + 1 \\ \hline \end{array}$	$\begin{array}{r} 3 \\ + 7 \\ \hline \end{array}$	$\begin{array}{r} 5 \\ + 10 \\ \hline \end{array}$	$\begin{array}{r} 1 \\ + 9 \\ \hline \end{array}$	$\begin{array}{r} 4 \\ + 4 \\ \hline \end{array}$	$\begin{array}{r} 2 \\ + 10 \\ \hline \end{array}$	$\begin{array}{r} 6 \\ + 3 \\ \hline \end{array}$	$\begin{array}{r} 4 \\ + 5 \\ \hline \end{array}$	$\begin{array}{r} 9 \\ + 9 \\ \hline \end{array}$	$\begin{array}{r} 2 \\ + 1 \\ \hline \end{array}$
$\begin{array}{r} 8 \\ + 7 \\ \hline \end{array}$	$\begin{array}{r} 6 \\ + 1 \\ \hline \end{array}$	$\begin{array}{r} 7 \\ + 0 \\ \hline \end{array}$	$\begin{array}{r} 4 \\ + 2 \\ \hline \end{array}$	$\begin{array}{r} 8 \\ + 1 \\ \hline \end{array}$	$\begin{array}{r} 1 \\ + 4 \\ \hline \end{array}$	$\begin{array}{r} 3 \\ + 8 \\ \hline \end{array}$	$\begin{array}{r} 9 \\ + 3 \\ \hline \end{array}$	$\begin{array}{r} 6 \\ + 9 \\ \hline \end{array}$	$\begin{array}{r} 7 \\ + 10 \\ \hline \end{array}$


Name: \_\_\_\_\_

Date: \_\_\_\_\_

# Summer Work Packet for 2nd Grade

*Why did the frog go to the hospital? To keep from croaking!*

Complete the Activity.



$\begin{array}{r} 7 \\ + 2 \\ \hline \end{array}$	$\begin{array}{r} 5 \\ + 3 \\ \hline \end{array}$	$\begin{array}{r} 9 \\ + 3 \\ \hline \end{array}$	$\begin{array}{r} 5 \\ + 10 \\ \hline \end{array}$	$\begin{array}{r} 3 \\ + 6 \\ \hline \end{array}$	$\begin{array}{r} 10 \\ + 4 \\ \hline \end{array}$	$\begin{array}{r} 9 \\ + 9 \\ \hline \end{array}$	$\begin{array}{r} 10 \\ + 3 \\ \hline \end{array}$	$\begin{array}{r} 7 \\ + 10 \\ \hline \end{array}$	$\begin{array}{r} 10 \\ + 1 \\ \hline \end{array}$
$\begin{array}{r} 7 \\ + 6 \\ \hline \end{array}$	$\begin{array}{r} 4 \\ + 9 \\ \hline \end{array}$	$\begin{array}{r} 6 \\ + 2 \\ \hline \end{array}$	$\begin{array}{r} 3 \\ + 4 \\ \hline \end{array}$	$\begin{array}{r} 3 \\ + 0 \\ \hline \end{array}$	$\begin{array}{r} 1 \\ + 3 \\ \hline \end{array}$	$\begin{array}{r} 6 \\ + 5 \\ \hline \end{array}$	$\begin{array}{r} 1 \\ + 8 \\ \hline \end{array}$	$\begin{array}{r} 6 \\ + 0 \\ \hline \end{array}$	$\begin{array}{r} 4 \\ + 8 \\ \hline \end{array}$
$\begin{array}{r} 3 \\ + 8 \\ \hline \end{array}$	$\begin{array}{r} 10 \\ + 5 \\ \hline \end{array}$	$\begin{array}{r} 9 \\ + 2 \\ \hline \end{array}$	$\begin{array}{r} 4 \\ + 0 \\ \hline \end{array}$	$\begin{array}{r} 10 \\ + 7 \\ \hline \end{array}$	$\begin{array}{r} 7 \\ + 7 \\ \hline \end{array}$	$\begin{array}{r} 2 \\ + 2 \\ \hline \end{array}$	$\begin{array}{r} 2 \\ + 4 \\ \hline \end{array}$	$\begin{array}{r} 6 \\ + 6 \\ \hline \end{array}$	$\begin{array}{r} 8 \\ + 4 \\ \hline \end{array}$
$\begin{array}{r} 10 \\ + 0 \\ \hline \end{array}$	$\begin{array}{r} 2 \\ + 1 \\ \hline \end{array}$	$\begin{array}{r} 8 \\ + 2 \\ \hline \end{array}$	$\begin{array}{r} 2 \\ + 3 \\ \hline \end{array}$	$\begin{array}{r} 1 \\ + 9 \\ \hline \end{array}$	$\begin{array}{r} 9 \\ + 0 \\ \hline \end{array}$	$\begin{array}{r} 6 \\ + 8 \\ \hline \end{array}$	$\begin{array}{r} 8 \\ + 9 \\ \hline \end{array}$	$\begin{array}{r} 7 \\ + 8 \\ \hline \end{array}$	$\begin{array}{r} 5 \\ + 8 \\ \hline \end{array}$
$\begin{array}{r} 1 \\ + 5 \\ \hline \end{array}$	$\begin{array}{r} 4 \\ + 4 \\ \hline \end{array}$	$\begin{array}{r} 3 \\ + 1 \\ \hline \end{array}$	$\begin{array}{r} 2 \\ + 9 \\ \hline \end{array}$	$\begin{array}{r} 5 \\ + 5 \\ \hline \end{array}$	$\begin{array}{r} 8 \\ + 3 \\ \hline \end{array}$	$\begin{array}{r} 6 \\ + 1 \\ \hline \end{array}$	$\begin{array}{r} 9 \\ + 8 \\ \hline \end{array}$	$\begin{array}{r} 2 \\ + 0 \\ \hline \end{array}$	$\begin{array}{r} 6 \\ + 3 \\ \hline \end{array}$
$\begin{array}{r} 3 \\ + 10 \\ \hline \end{array}$	$\begin{array}{r} 2 \\ + 10 \\ \hline \end{array}$	$\begin{array}{r} 8 \\ + 1 \\ \hline \end{array}$	$\begin{array}{r} 9 \\ + 5 \\ \hline \end{array}$	$\begin{array}{r} 2 \\ + 6 \\ \hline \end{array}$	$\begin{array}{r} 3 \\ + 2 \\ \hline \end{array}$	$\begin{array}{r} 8 \\ + 7 \\ \hline \end{array}$	$\begin{array}{r} 5 \\ + 9 \\ \hline \end{array}$	$\begin{array}{r} 5 \\ + 7 \\ \hline \end{array}$	$\begin{array}{r} 9 \\ + 7 \\ \hline \end{array}$
$\begin{array}{r} 1 \\ + 10 \\ \hline \end{array}$	$\begin{array}{r} 7 \\ + 9 \\ \hline \end{array}$	$\begin{array}{r} 3 \\ + 7 \\ \hline \end{array}$	$\begin{array}{r} 3 \\ + 9 \\ \hline \end{array}$	$\begin{array}{r} 8 \\ + 5 \\ \hline \end{array}$	$\begin{array}{r} 9 \\ + 4 \\ \hline \end{array}$	$\begin{array}{r} 1 \\ + 2 \\ \hline \end{array}$	$\begin{array}{r} 4 \\ + 3 \\ \hline \end{array}$	$\begin{array}{r} 8 \\ + 0 \\ \hline \end{array}$	$\begin{array}{r} 5 \\ + 4 \\ \hline \end{array}$
$\begin{array}{r} 9 \\ + 1 \\ \hline \end{array}$	$\begin{array}{r} 6 \\ + 10 \\ \hline \end{array}$	$\begin{array}{r} 8 \\ + 10 \\ \hline \end{array}$	$\begin{array}{r} 4 \\ + 6 \\ \hline \end{array}$	$\begin{array}{r} 4 \\ + 5 \\ \hline \end{array}$	$\begin{array}{r} 6 \\ + 4 \\ \hline \end{array}$	$\begin{array}{r} 8 \\ + 6 \\ \hline \end{array}$	$\begin{array}{r} 6 \\ + 7 \\ \hline \end{array}$	$\begin{array}{r} 3 \\ + 5 \\ \hline \end{array}$	$\begin{array}{r} 10 \\ + 2 \\ \hline \end{array}$
$\begin{array}{r} 10 \\ + 6 \\ \hline \end{array}$	$\begin{array}{r} 8 \\ + 8 \\ \hline \end{array}$	$\begin{array}{r} 10 \\ + 8 \\ \hline \end{array}$	$\begin{array}{r} 2 \\ + 8 \\ \hline \end{array}$	$\begin{array}{r} 2 \\ + 5 \\ \hline \end{array}$	$\begin{array}{r} 5 \\ + 6 \\ \hline \end{array}$	$\begin{array}{r} 4 \\ + 1 \\ \hline \end{array}$	$\begin{array}{r} 7 \\ + 1 \\ \hline \end{array}$	$\begin{array}{r} 9 \\ + 6 \\ \hline \end{array}$	$\begin{array}{r} 7 \\ + 3 \\ \hline \end{array}$
$\begin{array}{r} 7 \\ + 4 \\ \hline \end{array}$	$\begin{array}{r} 2 \\ + 7 \\ \hline \end{array}$	$\begin{array}{r} 3 \\ + 3 \\ \hline \end{array}$	$\begin{array}{r} 5 \\ + 1 \\ \hline \end{array}$	$\begin{array}{r} 7 \\ + 5 \\ \hline \end{array}$	$\begin{array}{r} 1 \\ + 1 \\ \hline \end{array}$	$\begin{array}{r} 6 \\ + 9 \\ \hline \end{array}$	$\begin{array}{r} 4 \\ + 7 \\ \hline \end{array}$	$\begin{array}{r} 1 \\ + 6 \\ \hline \end{array}$	$\begin{array}{r} 7 \\ + 0 \\ \hline \end{array}$


Name: \_\_\_\_\_

Date: \_\_\_\_\_

# Summer Work Packet for 2nd Grade

*Why did the police go to the baseball game? Somebody stole second base!*

Complete the Activity.



$\begin{array}{r} 10 \\ -7 \\ \hline \end{array}$	$\begin{array}{r} 3 \\ -1 \\ \hline \end{array}$	$\begin{array}{r} 3 \\ -2 \\ \hline \end{array}$	$\begin{array}{r} 5 \\ -0 \\ \hline \end{array}$	$\begin{array}{r} 5 \\ -4 \\ \hline \end{array}$	$\begin{array}{r} 7 \\ -2 \\ \hline \end{array}$	$\begin{array}{r} 7 \\ -6 \\ \hline \end{array}$	$\begin{array}{r} 4 \\ -4 \\ \hline \end{array}$	$\begin{array}{r} 4 \\ -1 \\ \hline \end{array}$	$\begin{array}{r} 8 \\ -1 \\ \hline \end{array}$
$\begin{array}{r} 5 \\ -2 \\ \hline \end{array}$	$\begin{array}{r} 10 \\ -5 \\ \hline \end{array}$	$\begin{array}{r} 10 \\ -4 \\ \hline \end{array}$	$\begin{array}{r} 4 \\ -3 \\ \hline \end{array}$	$\begin{array}{r} 6 \\ -3 \\ \hline \end{array}$	$\begin{array}{r} 10 \\ -3 \\ \hline \end{array}$	$\begin{array}{r} 7 \\ -1 \\ \hline \end{array}$	$\begin{array}{r} 6 \\ -0 \\ \hline \end{array}$	$\begin{array}{r} 4 \\ -2 \\ \hline \end{array}$	$\begin{array}{r} 7 \\ -5 \\ \hline \end{array}$
$\begin{array}{r} 10 \\ -8 \\ \hline \end{array}$	$\begin{array}{r} 9 \\ -2 \\ \hline \end{array}$	$\begin{array}{r} 6 \\ -5 \\ \hline \end{array}$	$\begin{array}{r} 6 \\ -6 \\ \hline \end{array}$	$\begin{array}{r} 8 \\ -3 \\ \hline \end{array}$	$\begin{array}{r} 8 \\ -2 \\ \hline \end{array}$	$\begin{array}{r} 8 \\ -7 \\ \hline \end{array}$	$\begin{array}{r} 3 \\ -3 \\ \hline \end{array}$	$\begin{array}{r} 9 \\ -7 \\ \hline \end{array}$	$\begin{array}{r} 9 \\ -4 \\ \hline \end{array}$
$\begin{array}{r} 10 \\ -1 \\ \hline \end{array}$	$\begin{array}{r} 8 \\ -4 \\ \hline \end{array}$	$\begin{array}{r} 9 \\ -0 \\ \hline \end{array}$	$\begin{array}{r} 3 \\ -0 \\ \hline \end{array}$	$\begin{array}{r} 6 \\ -2 \\ \hline \end{array}$	$\begin{array}{r} 6 \\ -1 \\ \hline \end{array}$	$\begin{array}{r} 9 \\ -3 \\ \hline \end{array}$	$\begin{array}{r} 7 \\ -3 \\ \hline \end{array}$	$\begin{array}{r} 8 \\ -8 \\ \hline \end{array}$	$\begin{array}{r} 10 \\ -10 \\ \hline \end{array}$
$\begin{array}{r} 9 \\ -8 \\ \hline \end{array}$	$\begin{array}{r} 7 \\ -0 \\ \hline \end{array}$	$\begin{array}{r} 7 \\ -3 \\ \hline \end{array}$	$\begin{array}{r} 5 \\ -3 \\ \hline \end{array}$	$\begin{array}{r} 4 \\ -0 \\ \hline \end{array}$	$\begin{array}{r} 10 \\ -9 \\ \hline \end{array}$	$\begin{array}{r} 9 \\ -1 \\ \hline \end{array}$	$\begin{array}{r} 7 \\ -7 \\ \hline \end{array}$	$\begin{array}{r} 5 \\ -1 \\ \hline \end{array}$	$\begin{array}{r} 10 \\ -2 \\ \hline \end{array}$
$\begin{array}{r} 9 \\ -6 \\ \hline \end{array}$	$\begin{array}{r} 5 \\ -5 \\ \hline \end{array}$	$\begin{array}{r} 9 \\ -5 \\ \hline \end{array}$	$\begin{array}{r} 6 \\ -4 \\ \hline \end{array}$	$\begin{array}{r} 8 \\ -5 \\ \hline \end{array}$	$\begin{array}{r} 7 \\ -4 \\ \hline \end{array}$	$\begin{array}{r} 9 \\ -9 \\ \hline \end{array}$	$\begin{array}{r} 4 \\ -4 \\ \hline \end{array}$	$\begin{array}{r} 10 \\ -0 \\ \hline \end{array}$	$\begin{array}{r} 8 \\ -6 \\ \hline \end{array}$
$\begin{array}{r} 10 \\ -6 \\ \hline \end{array}$	$\begin{array}{r} 8 \\ -0 \\ \hline \end{array}$	$\begin{array}{r} 10 \\ -9 \\ \hline \end{array}$	$\begin{array}{r} 9 \\ -2 \\ \hline \end{array}$	$\begin{array}{r} 5 \\ -3 \\ \hline \end{array}$	$\begin{array}{r} 5 \\ -0 \\ \hline \end{array}$	$\begin{array}{r} 8 \\ -5 \\ \hline \end{array}$	$\begin{array}{r} 4 \\ -0 \\ \hline \end{array}$	$\begin{array}{r} 6 \\ -2 \\ \hline \end{array}$	$\begin{array}{r} 7 \\ -2 \\ \hline \end{array}$
$\begin{array}{r} 9 \\ -0 \\ \hline \end{array}$	$\begin{array}{r} 6 \\ -6 \\ \hline \end{array}$	$\begin{array}{r} 8 \\ -4 \\ \hline \end{array}$	$\begin{array}{r} 3 \\ -3 \\ \hline \end{array}$	$\begin{array}{r} 6 \\ -0 \\ \hline \end{array}$	$\begin{array}{r} 6 \\ -3 \\ \hline \end{array}$	$\begin{array}{r} 3 \\ -2 \\ \hline \end{array}$	$\begin{array}{r} 9 \\ -7 \\ \hline \end{array}$	$\begin{array}{r} 10 \\ -10 \\ \hline \end{array}$	$\begin{array}{r} 9 \\ -0 \\ \hline \end{array}$
$\begin{array}{r} 3 \\ -0 \\ \hline \end{array}$	$\begin{array}{r} 5 \\ -1 \\ \hline \end{array}$	$\begin{array}{r} 3 \\ -1 \\ \hline \end{array}$	$\begin{array}{r} 4 \\ -4 \\ \hline \end{array}$	$\begin{array}{r} 6 \\ -4 \\ \hline \end{array}$	$\begin{array}{r} 3 \\ -0 \\ \hline \end{array}$	$\begin{array}{r} 7 \\ -0 \\ \hline \end{array}$	$\begin{array}{r} 6 \\ -6 \\ \hline \end{array}$	$\begin{array}{r} 9 \\ -8 \\ \hline \end{array}$	$\begin{array}{r} 3 \\ -0 \\ \hline \end{array}$
$\begin{array}{r} 8 \\ -4 \\ \hline \end{array}$	$\begin{array}{r} 3 \\ -3 \\ \hline \end{array}$	$\begin{array}{r} 7 \\ -6 \\ \hline \end{array}$	$\begin{array}{r} 8 \\ -7 \\ \hline \end{array}$	$\begin{array}{r} 4 \\ -3 \\ \hline \end{array}$	$\begin{array}{r} 9 \\ -2 \\ \hline \end{array}$	$\begin{array}{r} 10 \\ -3 \\ \hline \end{array}$	$\begin{array}{r} 6 \\ -6 \\ \hline \end{array}$	$\begin{array}{r} 10 \\ -8 \\ \hline \end{array}$	$\begin{array}{r} 3 \\ -1 \\ \hline \end{array}$


Name: \_\_\_\_\_

Date: \_\_\_\_\_

# Summer Work Packet for 2nd Grade

*What is the tallest building in the world? A library -- it has so many stories!*

Complete the Activity.



$\begin{array}{r} 4 \\ -1 \\ \hline \end{array}$	$\begin{array}{r} 10 \\ -6 \\ \hline \end{array}$	$\begin{array}{r} 7 \\ -6 \\ \hline \end{array}$	$\begin{array}{r} 5 \\ -3 \\ \hline \end{array}$	$\begin{array}{r} 8 \\ -7 \\ \hline \end{array}$	$\begin{array}{r} 3 \\ -2 \\ \hline \end{array}$	$\begin{array}{r} 10 \\ -0 \\ \hline \end{array}$	$\begin{array}{r} 10 \\ -9 \\ \hline \end{array}$	$\begin{array}{r} 8 \\ -5 \\ \hline \end{array}$	$\begin{array}{r} 4 \\ -0 \\ \hline \end{array}$
$\begin{array}{r} 6 \\ -4 \\ \hline \end{array}$	$\begin{array}{r} 3 \\ -1 \\ \hline \end{array}$	$\begin{array}{r} 9 \\ -6 \\ \hline \end{array}$	$\begin{array}{r} 8 \\ -2 \\ \hline \end{array}$	$\begin{array}{r} 7 \\ -5 \\ \hline \end{array}$	$\begin{array}{r} 6 \\ -0 \\ \hline \end{array}$	$\begin{array}{r} 4 \\ -4 \\ \hline \end{array}$	$\begin{array}{r} 4 \\ -3 \\ \hline \end{array}$	$\begin{array}{r} 5 \\ -5 \\ \hline \end{array}$	$\begin{array}{r} 8 \\ -6 \\ \hline \end{array}$
$\begin{array}{r} 7 \\ -3 \\ \hline \end{array}$	$\begin{array}{r} 6 \\ -1 \\ \hline \end{array}$	$\begin{array}{r} 8 \\ -1 \\ \hline \end{array}$	$\begin{array}{r} 9 \\ -4 \\ \hline \end{array}$	$\begin{array}{r} 3 \\ -3 \\ \hline \end{array}$	$\begin{array}{r} 8 \\ -0 \\ \hline \end{array}$	$\begin{array}{r} 3 \\ -0 \\ \hline \end{array}$	$\begin{array}{r} 5 \\ -1 \\ \hline \end{array}$	$\begin{array}{r} 7 \\ -0 \\ \hline \end{array}$	$\begin{array}{r} 5 \\ -2 \\ \hline \end{array}$
$\begin{array}{r} 5 \\ -4 \\ \hline \end{array}$	$\begin{array}{r} 10 \\ -7 \\ \hline \end{array}$	$\begin{array}{r} 6 \\ -3 \\ \hline \end{array}$	$\begin{array}{r} 7 \\ -2 \\ \hline \end{array}$	$\begin{array}{r} 9 \\ -9 \\ \hline \end{array}$	$\begin{array}{r} 10 \\ -2 \\ \hline \end{array}$	$\begin{array}{r} 8 \\ -4 \\ \hline \end{array}$	$\begin{array}{r} 7 \\ -7 \\ \hline \end{array}$	$\begin{array}{r} 5 \\ -0 \\ \hline \end{array}$	$\begin{array}{r} 10 \\ -4 \\ \hline \end{array}$
$\begin{array}{r} 10 \\ -8 \\ \hline \end{array}$	$\begin{array}{r} 9 \\ -1 \\ \hline \end{array}$	$\begin{array}{r} 8 \\ -8 \\ \hline \end{array}$	$\begin{array}{r} 7 \\ -1 \\ \hline \end{array}$	$\begin{array}{r} 6 \\ -2 \\ \hline \end{array}$	$\begin{array}{r} 10 \\ -1 \\ \hline \end{array}$	$\begin{array}{r} 4 \\ -3 \\ \hline \end{array}$	$\begin{array}{r} 4 \\ -2 \\ \hline \end{array}$	$\begin{array}{r} 9 \\ -7 \\ \hline \end{array}$	$\begin{array}{r} 9 \\ -2 \\ \hline \end{array}$
$\begin{array}{r} 7 \\ -4 \\ \hline \end{array}$	$\begin{array}{r} 8 \\ -3 \\ \hline \end{array}$	$\begin{array}{r} 6 \\ -6 \\ \hline \end{array}$	$\begin{array}{r} 8 \\ -2 \\ \hline \end{array}$	$\begin{array}{r} 9 \\ -8 \\ \hline \end{array}$	$\begin{array}{r} 7 \\ -3 \\ \hline \end{array}$	$\begin{array}{r} 6 \\ -5 \\ \hline \end{array}$	$\begin{array}{r} 5 \\ -4 \\ \hline \end{array}$	$\begin{array}{r} 9 \\ -3 \\ \hline \end{array}$	$\begin{array}{r} 10 \\ -10 \\ \hline \end{array}$
$\begin{array}{r} 10 \\ -3 \\ \hline \end{array}$	$\begin{array}{r} 7 \\ -6 \\ \hline \end{array}$	$\begin{array}{r} 7 \\ -1 \\ \hline \end{array}$	$\begin{array}{r} 3 \\ -2 \\ \hline \end{array}$	$\begin{array}{r} 7 \\ -6 \\ \hline \end{array}$	$\begin{array}{r} 9 \\ -5 \\ \hline \end{array}$	$\begin{array}{r} 9 \\ -3 \\ \hline \end{array}$	$\begin{array}{r} 5 \\ -0 \\ \hline \end{array}$	$\begin{array}{r} 4 \\ -2 \\ \hline \end{array}$	$\begin{array}{r} 10 \\ -5 \\ \hline \end{array}$
$\begin{array}{r} 8 \\ -2 \\ \hline \end{array}$	$\begin{array}{r} 9 \\ -0 \\ \hline \end{array}$	$\begin{array}{r} 6 \\ -5 \\ \hline \end{array}$	$\begin{array}{r} 5 \\ -5 \\ \hline \end{array}$	$\begin{array}{r} 3 \\ -2 \\ \hline \end{array}$	$\begin{array}{r} 8 \\ -5 \\ \hline \end{array}$	$\begin{array}{r} 8 \\ -2 \\ \hline \end{array}$	$\begin{array}{r} 7 \\ -2 \\ \hline \end{array}$	$\begin{array}{r} 8 \\ -0 \\ \hline \end{array}$	$\begin{array}{r} 4 \\ -1 \\ \hline \end{array}$
$\begin{array}{r} 7 \\ -1 \\ \hline \end{array}$	$\begin{array}{r} 6 \\ -4 \\ \hline \end{array}$	$\begin{array}{r} 6 \\ -3 \\ \hline \end{array}$	$\begin{array}{r} 5 \\ -0 \\ \hline \end{array}$	$\begin{array}{r} 7 \\ -6 \\ \hline \end{array}$	$\begin{array}{r} 7 \\ -4 \\ \hline \end{array}$	$\begin{array}{r} 3 \\ -0 \\ \hline \end{array}$	$\begin{array}{r} 5 \\ -2 \\ \hline \end{array}$	$\begin{array}{r} 3 \\ -1 \\ \hline \end{array}$	$\begin{array}{r} 8 \\ -3 \\ \hline \end{array}$
$\begin{array}{r} 10 \\ -0 \\ \hline \end{array}$	$\begin{array}{r} 4 \\ -0 \\ \hline \end{array}$	$\begin{array}{r} 9 \\ -0 \\ \hline \end{array}$	$\begin{array}{r} 3 \\ -3 \\ \hline \end{array}$	$\begin{array}{r} 6 \\ -2 \\ \hline \end{array}$	$\begin{array}{r} 5 \\ -3 \\ \hline \end{array}$	$\begin{array}{r} 3 \\ -3 \\ \hline \end{array}$	$\begin{array}{r} 9 \\ -1 \\ \hline \end{array}$	$\begin{array}{r} 5 \\ -2 \\ \hline \end{array}$	$\begin{array}{r} 5 \\ -5 \\ \hline \end{array}$




Name: \_\_\_\_\_

Date: \_\_\_\_\_

# Summer Work Packet for 2nd Grade

*What is a history teacher's favourite fruit? Dates!*

Complete the Activity.



$\begin{array}{r} 8 \\ + 1 \\ \hline \end{array}$	$\begin{array}{r} 4 \\ + 0 \\ \hline \end{array}$	$\begin{array}{r} 5 \\ - 1 \\ \hline \end{array}$	$\begin{array}{r} 9 \\ - 0 \\ \hline \end{array}$	$\begin{array}{r} 8 \\ + 7 \\ \hline \end{array}$	$\begin{array}{r} 9 \\ + 5 \\ \hline \end{array}$	$\begin{array}{r} 5 \\ + 2 \\ \hline \end{array}$	$\begin{array}{r} 8 \\ - 3 \\ \hline \end{array}$	$\begin{array}{r} 3 \\ + 0 \\ \hline \end{array}$	$\begin{array}{r} 3 \\ - 1 \\ \hline \end{array}$
$\begin{array}{r} 9 \\ + 3 \\ \hline \end{array}$	$\begin{array}{r} 7 \\ + 10 \\ \hline \end{array}$	$\begin{array}{r} 4 \\ + 4 \\ \hline \end{array}$	$\begin{array}{r} 3 \\ + 7 \\ \hline \end{array}$	$\begin{array}{r} 8 \\ - 0 \\ \hline \end{array}$	$\begin{array}{r} 3 \\ + 5 \\ \hline \end{array}$	$\begin{array}{r} 7 \\ - 6 \\ \hline \end{array}$	$\begin{array}{r} 9 \\ - 9 \\ \hline \end{array}$	$\begin{array}{r} 9 \\ - 1 \\ \hline \end{array}$	$\begin{array}{r} 4 \\ - 2 \\ \hline \end{array}$
$\begin{array}{r} 7 \\ - 2 \\ \hline \end{array}$	$\begin{array}{r} 5 \\ + 5 \\ \hline \end{array}$	$\begin{array}{r} 3 \\ + 9 \\ \hline \end{array}$	$\begin{array}{r} 7 \\ + 0 \\ \hline \end{array}$	$\begin{array}{r} 8 \\ - 5 \\ \hline \end{array}$	$\begin{array}{r} 5 \\ + 6 \\ \hline \end{array}$	$\begin{array}{r} 10 \\ + 4 \\ \hline \end{array}$	$\begin{array}{r} 5 \\ + 8 \\ \hline \end{array}$	$\begin{array}{r} 5 \\ + 1 \\ \hline \end{array}$	$\begin{array}{r} 10 \\ + 1 \\ \hline \end{array}$
$\begin{array}{r} 3 \\ - 2 \\ \hline \end{array}$	$\begin{array}{r} 4 \\ + 6 \\ \hline \end{array}$	$\begin{array}{r} 3 \\ + 3 \\ \hline \end{array}$	$\begin{array}{r} 9 \\ + 6 \\ \hline \end{array}$	$\begin{array}{r} 3 \\ - 0 \\ \hline \end{array}$	$\begin{array}{r} 4 \\ + 10 \\ \hline \end{array}$	$\begin{array}{r} 9 \\ - 2 \\ \hline \end{array}$	$\begin{array}{r} 3 \\ + 2 \\ \hline \end{array}$	$\begin{array}{r} 6 \\ + 10 \\ \hline \end{array}$	$\begin{array}{r} 6 \\ - 0 \\ \hline \end{array}$
$\begin{array}{r} 3 \\ + 6 \\ \hline \end{array}$	$\begin{array}{r} 6 \\ + 2 \\ \hline \end{array}$	$\begin{array}{r} 4 \\ - 4 \\ \hline \end{array}$	$\begin{array}{r} 10 \\ + 6 \\ \hline \end{array}$	$\begin{array}{r} 7 \\ + 9 \\ \hline \end{array}$	$\begin{array}{r} 3 \\ + 4 \\ \hline \end{array}$	$\begin{array}{r} 10 \\ + 0 \\ \hline \end{array}$	$\begin{array}{r} 10 \\ + 7 \\ \hline \end{array}$	$\begin{array}{r} 4 \\ - 1 \\ \hline \end{array}$	$\begin{array}{r} 9 \\ + 7 \\ \hline \end{array}$
$\begin{array}{r} 4 \\ + 9 \\ \hline \end{array}$	$\begin{array}{r} 7 \\ + 1 \\ \hline \end{array}$	$\begin{array}{r} 7 \\ - 4 \\ \hline \end{array}$	$\begin{array}{r} 6 \\ - 5 \\ \hline \end{array}$	$\begin{array}{r} 4 \\ + 7 \\ \hline \end{array}$	$\begin{array}{r} 10 \\ - 5 \\ \hline \end{array}$	$\begin{array}{r} 6 \\ + 3 \\ \hline \end{array}$	$\begin{array}{r} 7 \\ + 5 \\ \hline \end{array}$	$\begin{array}{r} 6 \\ - 4 \\ \hline \end{array}$	$\begin{array}{r} 9 \\ - 4 \\ \hline \end{array}$
$\begin{array}{r} 10 \\ - 8 \\ \hline \end{array}$	$\begin{array}{r} 7 \\ - 5 \\ \hline \end{array}$	$\begin{array}{r} 3 \\ - 3 \\ \hline \end{array}$	$\begin{array}{r} 7 \\ + 3 \\ \hline \end{array}$	$\begin{array}{r} 9 \\ + 4 \\ \hline \end{array}$	$\begin{array}{r} 4 \\ + 8 \\ \hline \end{array}$	$\begin{array}{r} 6 \\ + 0 \\ \hline \end{array}$	$\begin{array}{r} 10 \\ + 8 \\ \hline \end{array}$	$\begin{array}{r} 9 \\ - 6 \\ \hline \end{array}$	$\begin{array}{r} 10 \\ - 7 \\ \hline \end{array}$
$\begin{array}{r} 5 \\ - 3 \\ \hline \end{array}$	$\begin{array}{r} 9 \\ - 3 \\ \hline \end{array}$	$\begin{array}{r} 10 \\ + 3 \\ \hline \end{array}$	$\begin{array}{r} 5 \\ - 2 \\ \hline \end{array}$	$\begin{array}{r} 10 \\ - 6 \\ \hline \end{array}$	$\begin{array}{r} 6 \\ - 1 \\ \hline \end{array}$	$\begin{array}{r} 5 \\ - 4 \\ \hline \end{array}$	$\begin{array}{r} 3 \\ + 10 \\ \hline \end{array}$	$\begin{array}{r} 7 \\ - 1 \\ \hline \end{array}$	$\begin{array}{r} 8 \\ + 10 \\ \hline \end{array}$
$\begin{array}{r} 4 \\ - 3 \\ \hline \end{array}$	$\begin{array}{r} 9 \\ + 9 \\ \hline \end{array}$	$\begin{array}{r} 9 \\ - 8 \\ \hline \end{array}$	$\begin{array}{r} 5 \\ + 7 \\ \hline \end{array}$	$\begin{array}{r} 9 \\ + 0 \\ \hline \end{array}$	$\begin{array}{r} 5 \\ + 3 \\ \hline \end{array}$	$\begin{array}{r} 8 \\ - 2 \\ \hline \end{array}$	$\begin{array}{r} 8 \\ - 6 \\ \hline \end{array}$	$\begin{array}{r} 7 \\ - 7 \\ \hline \end{array}$	$\begin{array}{r} 6 \\ - 3 \\ \hline \end{array}$
$\begin{array}{r} 8 \\ - 8 \\ \hline \end{array}$	$\begin{array}{r} 7 \\ - 3 \\ \hline \end{array}$	$\begin{array}{r} 8 \\ - 4 \\ \hline \end{array}$	$\begin{array}{r} 7 \\ - 0 \\ \hline \end{array}$	$\begin{array}{r} 10 \\ - 4 \\ \hline \end{array}$	$\begin{array}{r} 5 \\ - 0 \\ \hline \end{array}$	$\begin{array}{r} 6 \\ - 6 \\ \hline \end{array}$	$\begin{array}{r} 10 \\ - 2 \\ \hline \end{array}$	$\begin{array}{r} 5 \\ - 5 \\ \hline \end{array}$	$\begin{array}{r} 10 \\ - 3 \\ \hline \end{array}$

Name \_\_\_\_\_

**Daily Review 11-13**

## **Problem Solving**

### **Too Much Information**

Cross out the information you do not need.  
Write the number sentence.

1. Ann finds 18 seashells.  
She gives 9 shells to Joe.  
6 seashells are white.  
How many seashells does she have left?

\_\_\_\_\_ - \_\_\_\_\_ = \_\_\_\_\_ seashells

2. Jeff sees 6 gulls.  
He sees 5 ducks.  
8 more gulls come.  
How many gulls are there now?

\_\_\_\_\_ + \_\_\_\_\_ = \_\_\_\_\_ gulls

3. 14 children are swimming.  
There are 2 lifeguards.  
5 children get out of the water.  
How many children are still swimming?

\_\_\_\_\_ - \_\_\_\_\_ = \_\_\_\_\_ children

---

## **Review and Remember**

Skip count by 5s. Write the missing numbers.

4. 5, 10, \_\_\_\_\_, 20, \_\_\_\_\_, \_\_\_\_\_, 35, \_\_\_\_\_

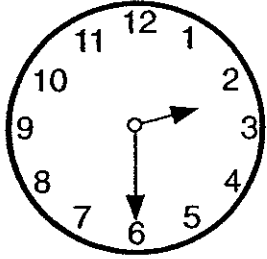
Name \_\_\_\_\_

Lions and lambs  
Time: hour and half hour

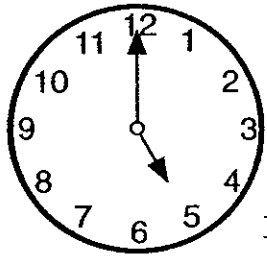
# Happy Time

Write the time below each clock.

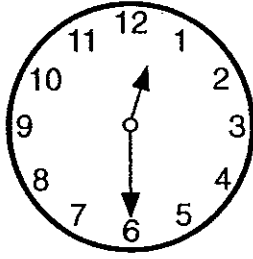
Use the answer box.




:



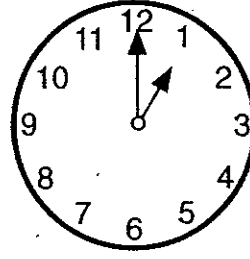
:



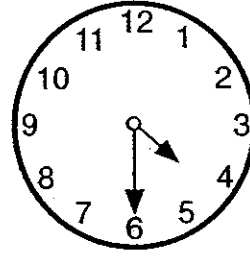
:



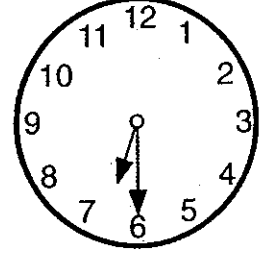
:



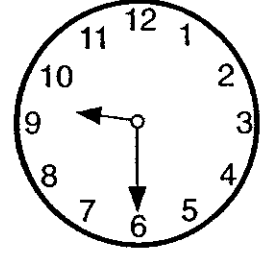
:



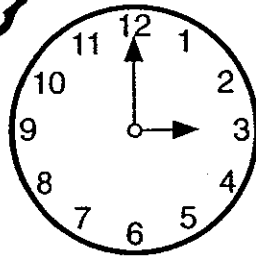
:



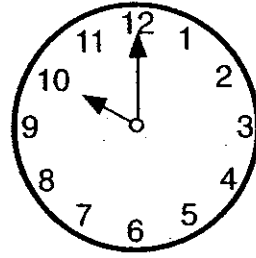
:



:



:



:









Answer Box		
1:00	4:30	12:30
6:30	3:00	9:30
5:00	7:00	10:00
	2:30	







Name \_\_\_\_\_

# PENNIES, NICKELS, AND DIMES

Show. Write how much.

Show. Write how much.

<p>1.</p>  <p>2                      4</p>	<p>14¢</p>
<p>2.</p>  <p>7                      6</p>	<p>_____</p>
<p>3.</p>  <p>3                      7</p>	<p>_____</p>
<p>4.</p>  <p>8                      5</p>	<p>_____</p>
<p>5.</p>  <p>4                      4</p>	<p>_____</p>
<p>6.</p>  <p>7                      3</p>	<p>_____</p>

<p>7.</p>  <p>2                      5                      3</p>	<p>_____</p>
<p>8.</p>  <p>3                      6                      6</p>	<p>_____</p>
<p>9.</p>  <p>1                      8                      2</p>	<p>_____</p>
<p>10.</p>  <p>6                      2                      1</p>	<p>_____</p>
<p>11.</p>  <p>5                      5                      5</p>	<p>_____</p>
<p>12.</p>  <p>8                      3                      4</p>	<p>_____</p>