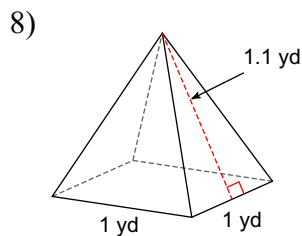
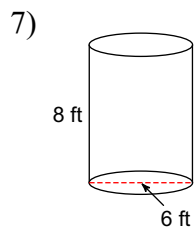
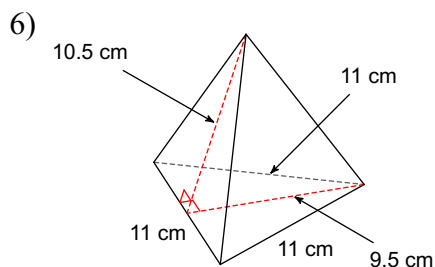
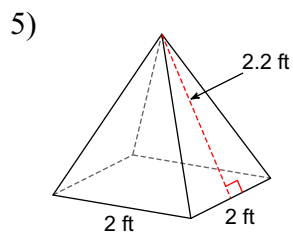
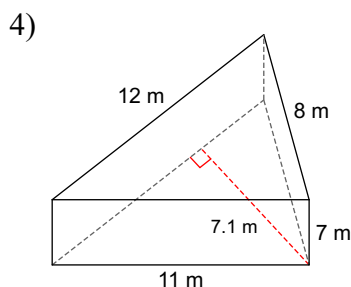
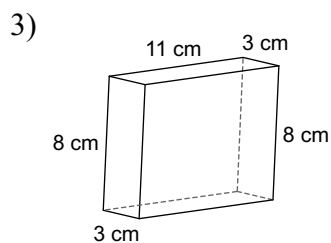
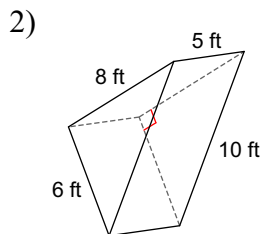
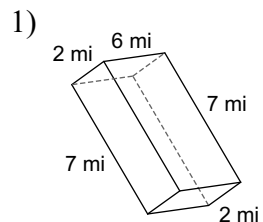
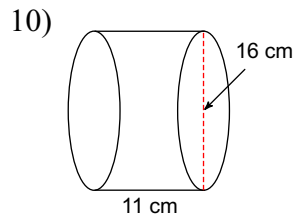
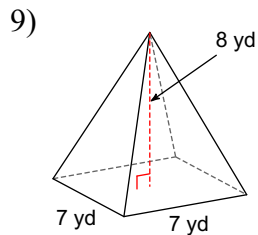


Unit 9 Test Review

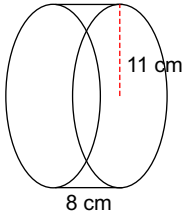
Find the surface area of each figure. Round to the nearest tenth.



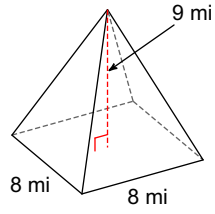
Find the volume of each figure. Round to the nearest tenth.



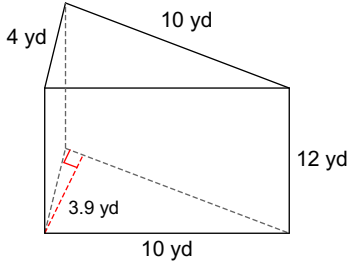
11)



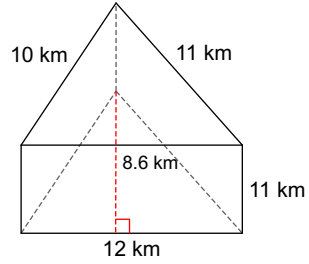
12)



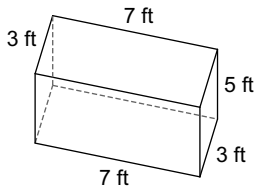
13)



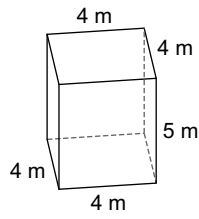
14)



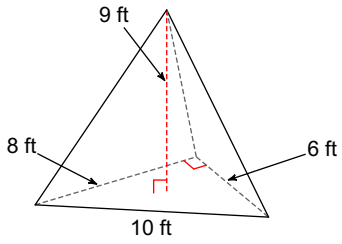
15)



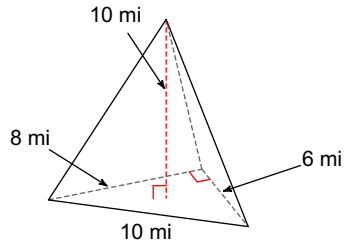
16)



17)



18)



## Answers to Unit 9 Test Review

- |                         |                           |                           |                        |
|-------------------------|---------------------------|---------------------------|------------------------|
| 1) $136 \text{ mi}^2$   | 2) $168 \text{ ft}^2$     | 3) $290 \text{ cm}^2$     | 4) $302.2 \text{ m}^2$ |
| 5) $12.8 \text{ ft}^2$  | 6) $225.5 \text{ cm}^2$   | 7) $207.3 \text{ ft}^2$   | 8) $3.2 \text{ yd}^2$  |
| 9) $130.7 \text{ yd}^3$ | 10) $2211.7 \text{ cm}^3$ | 11) $3041.1 \text{ cm}^3$ | 12) $192 \text{ mi}^3$ |
| 13) $234 \text{ yd}^3$  | 14) $567.6 \text{ km}^3$  | 15) $105 \text{ ft}^3$    | 16) $80 \text{ m}^3$   |
| 17) $72 \text{ ft}^3$   | 18) $80 \text{ mi}^3$     |                           |                        |