



SAMPLES OF STANDARDS STUDENTS ARE LEARNING THIS NINE WEEKS:

1st Grade Math

STANDARDS: 1.OA.1, 1.OA.3, 1.OA.4, 1.OA.5, 1.MD.3a, 1.MD.4, 1.MD.5a

1.OA.1

Sally saw 4 birds in a nest. 1 bird flew away. How many birds are there left in the nest?

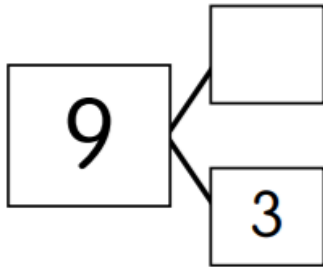
Answer: $4 - 1 = 3$ There are 3 birds left.



1.OA.3

Complete the number bond.

Write two addition sentences.



$$9 = \underline{\quad} + \underline{\quad}$$

$$\underline{\quad} + \underline{\quad} = 9$$

Answer: 6

$$9 = 6 + 3$$

$$6 + 3 = 9$$

1.0A.4

There are 5 stickers. 3 are blue.

The rest are yellow.

How many stickers are yellow?

_____ stickers are yellow.

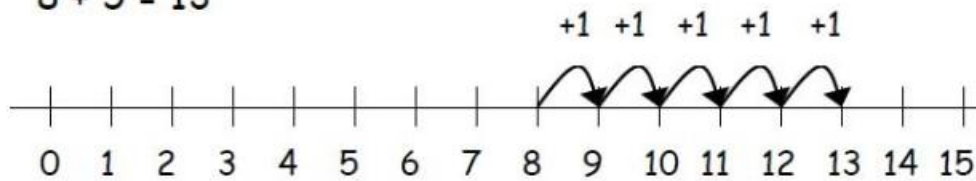
Correct Answer: $5 - 3 = 2$. 2 stickers are yellow.

1.0A.5

Students can count on to add and count back to subtract.

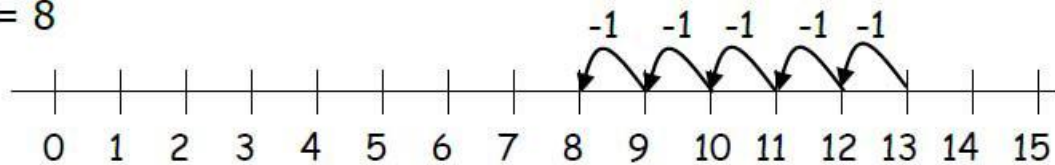
Count on to add.

$$8 + 5 = 13$$



Count back to subtract.

$$13 - 5 = 8$$

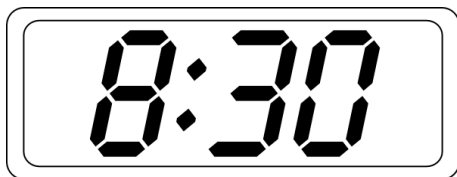


1.MD.3a

Mom wakes me up at 8 o'clock. Show this time on a digital and analog clock.



School is out at half past 3. Show this time on a digital and analog clock



1.MD.4

Fruit in a Bowl

Kind of Fruit	Number in Bowl
Apple	3
Banana	2
Orange	4

Which is true about the fruit in the bowl?

- A There are fewer oranges than apples.
- B There are fewer apples than bananas.
- C There are more oranges than apples.
- D There are more bananas than oranges.

1.MD.5a



© Can Stock Photo - csp4034046

How much money is this in all?

Correct Answer: **57** ¢

